




- 1 The incomplete pictogram shows information about the number of cycles sold in a shop on Tuesday, on Wednesday and on Thursday.

Tuesday	
Wednesday	
Thursday	
Friday	
Saturday	

Key:

A total of 20 cycles were sold on Tuesday, Wednesday and Thursday.

8 cycles were sold on Friday.




15 cycles were sold on Saturday.

Use this information to complete the pictogram.

(Total for Question is 3 marks)

- 2 There are only apple trees, cherry trees, pear trees and plum trees in an orchard.

The pictogram shows information about the numbers of apple trees, cherry trees and pear trees in the orchard.

Apple	
Cherry	
Pear	
Plum	

Key:


 represents 4 trees

There is a total of 30 trees in the orchard.

Complete the pictogram.

(Total for Question is 3 marks)

- 3 The incomplete pictogram shows information about the number of eggs sold from a farm shop on Monday.

Monday	
Tuesday	
Wednesday	

Key:

On Monday the shop sold 18 eggs.
On Tuesday the shop sold 24 eggs.
On Wednesday the shop sold 27 eggs.

Use this information to complete the pictogram and the key.

(Total for Question is 4 marks)